


SUMMER FUN

Review



Name _____

Circle the odd numbers.

13 24 7 38 99 105

Write the number in expanded form.

56 _____ + _____

Put the numbers in order from least to greatest.

67 29 81 17 30

Correct the sentences.

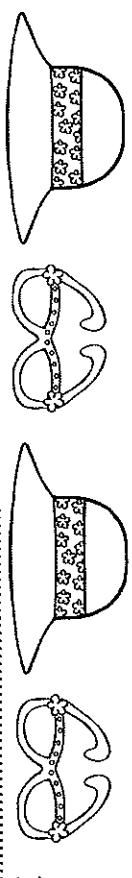
Jenny is so excited about summer vacation

do you want to play a gam

Circle the adjectives. (Describing words)

kind table hard soft boy

Write a question about summer.



What numbers come next?

25, 30, 35, , ,

What is the value of the underlined digits?

38 76 14

Write the numbers that are 10 less and 10 more.

 45 10 more 79 10 more

Correct the sentences.

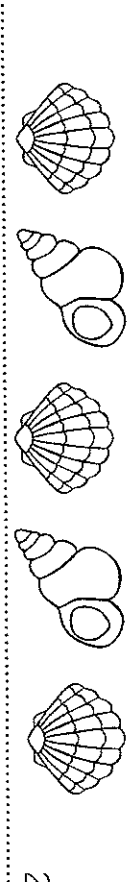
we swimmmed at the beach today

ouch that crab bite me

Circle the nouns. (person, place, thing)

lifeguard red water umbrella big

Write a sentence about the beach.



Write the answers.

$7 + 5 = \underline{\quad}$ $8 + 6 = \underline{\quad}$ $7 + 8 = \underline{\quad}$

Write the number in word form.

75 _____

Put the numbers in order from greatest to least.

77 13 96 45 19

Correct the sentences.


sara checked out sum books

why cant we go to the pool

Circle the verbs. (action words)

swim dance nickel popside eating

Write an exclamation about a shark.

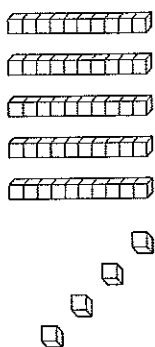


3

What numbers come next?

45, 55, 65, _____, _____, _____

What is the value?



Add the numbers.

$$\begin{array}{r} 45 \\ +21 \\ \hline \end{array}$$

$$\begin{array}{r} 34 \\ +24 \\ \hline \end{array}$$

$$\begin{array}{r} 72 \\ +15 \\ \hline \end{array}$$

$$\begin{array}{r} 19 \\ +10 \\ \hline \end{array}$$

$$\begin{array}{r} 56 \\ +43 \\ \hline \end{array}$$

Correct the sentences.

do I haf to wear sunscreen

bob eated all the ice cream

Circle the subject of the sentence. (who or what it's about)

The playful seal swam in the blue ocean.

Write a sentence about the ocean.



Write the missing number.

$$7 + \square = 16 \quad \square + 6 = 14 \quad \square + 8 = 13$$

Write the number in word form.

234

Subtract the numbers.

$$\begin{array}{r} 45 \\ -21 \\ \hline \end{array} \quad \begin{array}{r} 89 \\ -43 \\ \hline \end{array} \quad \begin{array}{r} 67 \\ -34 \\ \hline \end{array} \quad \begin{array}{r} 93 \\ -51 \\ \hline \end{array}$$

Correct the sentences.

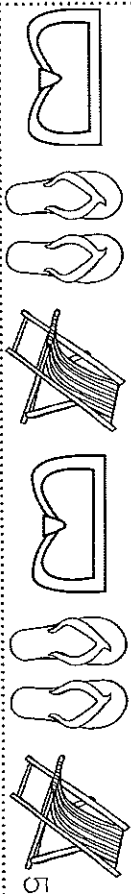
mom and me made lemonade

cathy didnt go to the park today

Circle the plural nouns. (more than one)

shell towels slippers goggles chair

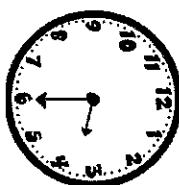
Write a synonym for happy. (means the same)



What numbers come next?

$$14 - \square = 8 \quad 17 - \square = 8 \quad 12 - \square = 8$$

What is the time?



Add the numbers.

$$\begin{array}{r} 28 \\ +35 \\ \hline \end{array} \quad \begin{array}{r} 34 \\ +28 \\ \hline \end{array} \quad \begin{array}{r} 56 \\ +15 \\ \hline \end{array} \quad \begin{array}{r} 78 \\ +15 \\ \hline \end{array} \quad \begin{array}{r} 47 \\ +26 \\ \hline \end{array}$$

Correct the sentences.

did you sea that new movie

you shouldnt swim out too far

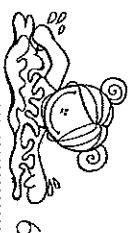
Circle the synonyms. (words that mean the same thing)

mean kid sad child big

Write a sentence using the pronoun she.



Splash



Write the missing number.

$$3 + \square = 10 \quad \square + 6 = 10 \quad \square + 2 = 10$$

Fill in the circle with <, >, =

$$134 \bigcirc 154 \quad 398 \bigcirc 329 \quad 56 \bigcirc 65$$

Subtract the numbers.

$$\begin{array}{r} 63 \\ -36 \\ \hline \end{array} \quad \begin{array}{r} 71 \\ -45 \\ \hline \end{array} \quad \begin{array}{r} 45 \\ -29 \\ \hline \end{array} \quad \begin{array}{r} 20 \\ -12 \\ \hline \end{array}$$

Correct the sentences.

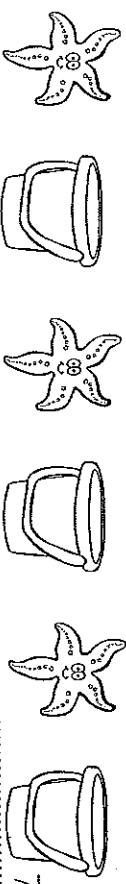
how many pieces of pie did matt eat

josh and sarn was digging in the sand

Circle the compound words.

starfish pencil campfire towel


Use these homophones in a sentence. blue / blew



Use the number line to find the difference. $50 - 8 =$ _____



What is the value of the coins?



There were 7 blue fish, 12 yellow fish and 9 red fish.

How many more yellow fish than blue fish are there?



Correct the sentences.

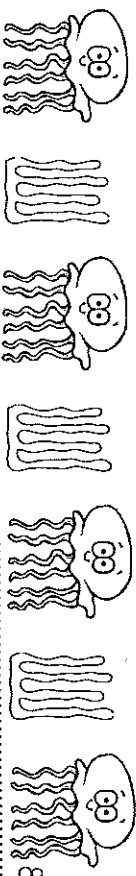
watch out for that crab

we is going camping


Circle the proper nouns.

boy Mr. Smith Texas dog Monica

Write a question about jellyfish.



Write the missing numbers.

| | | | | | | | |
|-------|---|-------|---|-------|---|-------|---|
| _____ | + | _____ | + | _____ | = | _____ |  |
|-------|---|-------|---|-------|---|-------|---|

Add the numbers.

| | | | |
|------------|------------|------------|------------|
| 43 | 31 | 40 | 34 |
| 18 | 25 | 33 | 51 |
| <u>+15</u> | <u>+13</u> | <u>+29</u> | <u>+12</u> |

Correct the sentences.

tinns mom made cookies

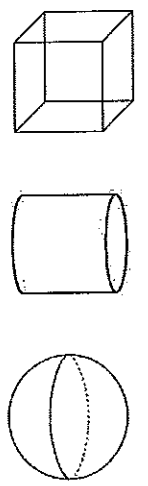
our family is going to disneyland

Write the words in ABC order: sun beach waves

Use the contraction won't in a sentence.



Circle the cylinder.



What time is it?

_____ : _____

Jenna had 365 stickers. Tasha has 459 stickers. How many stickers do they have in all?

Correct the sentences.

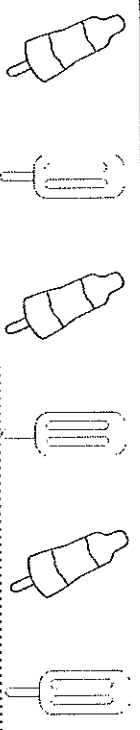
todd don't want to help his dad

i dont got no money

Circle the rhyming words.

bend send hand blend under

Write a sentence using the word popsicle.



Circle the even numbers.

234 403 682 730 455

Add the numbers.

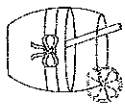
168 205 333 510

+131 +133 +265 +328

Circle the digit in the hundreds place. 678

Correct the sentences.

me and jenny made lemonade



i need a fork knife and spoon

Circle the predicate of the sentence. (action part)

Jack went rollerblading in the park.

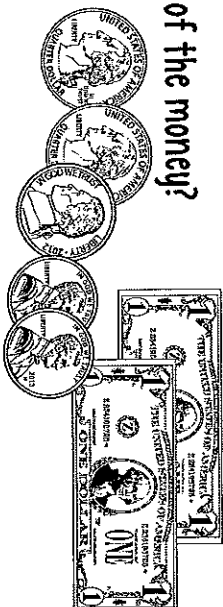
Answer the question in a complete sentence.

What is your favorite kind of ice cream?

Write the missing numbers.

_____ 567,568 _____

What is the value of the money?



Jon has 15 dollars. Sandy has 10 more dollars than Jon.
How much money does Sandy have?

Correct the sentences.

minda help her dad wash the dish

can we go played at the park

Write -s or -es to show more than one.

dish _____ cup _____ glass _____ fork _____

Write a sentence using the word vacation.




Write 4 ways to make 20.

Find the differences.

$$\begin{array}{r} 268 \\ -131 \\ \hline \end{array} \quad \begin{array}{r} 579 \\ -234 \\ \hline \end{array} \quad \begin{array}{r} 872 \\ -541 \\ \hline \end{array} \quad \begin{array}{r} 654 \\ -324 \\ \hline \end{array}$$

Draw coins to make 67 cents.



Correct the sentences.

we saw four mouses in the field

bobby lost his two front tooths


Write a verb for this sentence.

Helen is _____ on the beach.

Answer the question in a complete sentence.

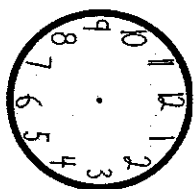
What is your favorite book?

Write the total value.



Draw the hour and minute hand

to show 4:15.



Tom has 236 baseball cards. He gave 129 to his friend.
How many baseball cards does he have now?

Correct the sentences.

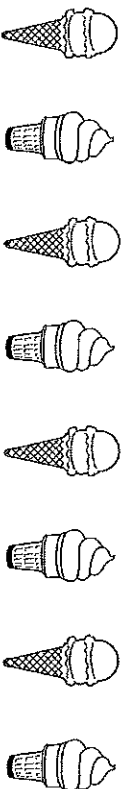
we all ate a ice cream cone

how did you liked the movie

Write the correct article a or an for each word.

_____ cup _____ egg _____ fork _____ apple

Write a sentence listing your 3 favorite colors.




Is the number 24 closer to 20 or 30? _____



Find the differences.

| | | | |
|-------------|-------------|-------------|-------------|
| 234 | 549 | 632 | 984 |
| <u>-125</u> | <u>-254</u> | <u>-342</u> | <u>-398</u> |

Draw coins to show \$0.80.




Correct the sentences.

grandma donna is come to visit

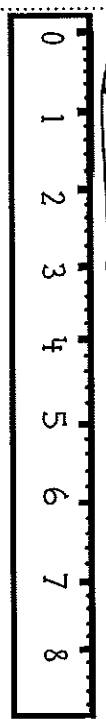
who eated all of my cake

Write two antonyms for the word happy. (opposite)

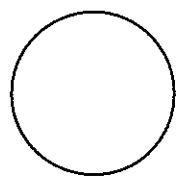

Write one fact about whales.



What is the length of the pencil? _____ inches



Divide these shapes into fourths.



There were 3 birds. Each bird had 3 worms.

How many worms did they have all together?



Correct the sentences.


those kittens is so cute

dont touch that hot pan





















Write the contraction for each of the words.

is not _____ we have _____

Make a list of items you might take camping.



Answer the questions using the graph.

| | | | | | |
|----------|---|---|---|---|---|
| apples |  |  |  |  |  |
| pears |  |  |  |  |  |
| grapes |  |  |  |  |  |
| cherries |  |  |  |  |  |

What fruit was chosen the most? _____

What fruit was chosen the least? _____

How many more people chose apples than pears? _____

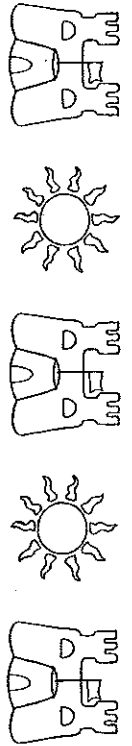
Correct the sentences.

i need to brush my hare

shouldnt you be sleep

Put these words in ABC order. sun sand skin

Write a sentence about what you need to make smores.



Fill in the circle with the missing sign. +, -, =

8 ○ 9 = 17 12 ○ 8 = 4 15 ○ 15

8 + 6 = _____ 4 + 5 = _____ 15 = 7 + _____

Taylor, Malie and Ruby each had a 12 inch ruler.

How many inches would it be if they lined up their rulers?

Correct the sentences.

you is going to be in trouble

my frends likes to play with me

Write two compound words.

Write the greeting of a letter to your parents.



Draw two ways to make \$1.00

| | |
|--|--|
| | |
|--|--|

Find the sums and differences.

$$\begin{array}{r} 346 \\ -176 \\ \hline \end{array} \quad \begin{array}{r} 456 \\ +318 \\ \hline \end{array} \quad \begin{array}{r} 606 \\ -258 \\ \hline \end{array} \quad \begin{array}{r} 745 \\ +299 \\ \hline \end{array} \quad \begin{array}{r} 834 \\ -413 \\ \hline \end{array} \quad \begin{array}{r} 567 \\ +567 \\ \hline \end{array}$$

Correct the sentences.


lets go to the fair, said mom

moms birthday is on june 12 1978

Circle the homophones. (words sound the same, but mean different things)

Mom knew I needed a new pair of shoes.

Write an exclamation about fireworks.



Fill in the missing numbers.

86, 88, 90, 92, _____
42, 52, 62, 72, _____
175, 180, 185, 190, _____

Matt baked 2 dozen cookies for his family. If there are 6 people in his family, how many cookies will they each get?

Correct the sentences.

summer vacation is grate

do i haf to go to bed

Write two words to describe summer vacation.

Write a sentence about your summer vacation.

